





FEBRUARY 2005

Sunday	Monday	Tuesday	Wednesday	Thursday	Friday	Saturday
For Grades 5 AND 6		1	2	3	4	5
		How many ways are there to make \$ 0.16?	What fraction of your family are girls? What fraction are boys?	What percentage of your family are females? What percentage are males?	What is the area of a rectangle 12 inches by 15 inches?	What two numbers that add to 12 give the greatest product?
6	7	8	9	10	11	12
How many quarter pound hamburgers can you make from 1-3/4 pounds of beef?	How many dimes equal a \$5 bill?	Find the next three numbers in this pattern: 10, 15, 12, 17, 14, __, __, __.	How many times can you bounce a ball in 30 seconds? Repeat 3 times. Find an average.	In 324,000,126, which digit is in the millions place?	3 kittens fit in a basket. How many baskets are needed for 25 kittens?	It takes 120 minutes to drive to San Diego. How many hours is the round trip?
13	14	15	16	17	18	19
The butcher makes 6 hot dogs per hour. How long does it take to make 1 hot dog?	Make up three addition word problems that have an answer of 50.	Add up the digits in your address. Multiply the sum by today's date.	Dr. Martin Luther King was born in 1929. How many years ago was that?	$5179 + 528 = 5607$. True or false? Prove it.	Look at newspaper ads and plan dinner for your family. You have \$50 to spend.	What is 50% of 500? 
20	21	22	23	24	25	26
If you get \$5.00 a week, how long will it take to save \$100.00?	What is the missing factor: _____ x 24 = 288?	If a pizza serves 8, how many pizzas will you buy for 35 people?	How old will you be in 2025? 	How many hours do you attend school in one week?	Keep a log of how many hours you sleep in one week. What is the range?	Record how much time you spend watching TV in one week. Make a bar graph. 
27	28	<h1>Math At Home</h1> 				
Count the number of windows in your house $\div 2$.	What is the missing addend: $375 + \underline{\quad} = 800$.					